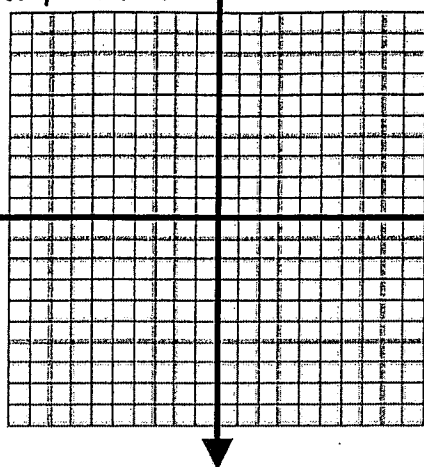



Name \_\_\_\_\_ Date \_\_\_\_\_  
 Show your work on a separate sheet of paper.

1.  $y = -2x - 1$

x	y
-2	
0	
2	




2.  $y = x + -1$




x	y
-2	
0	
2	

3.  $y = 5 - x$

x	y
-2	
0	
2	




4.  $y = 4$




x	y
-2	
0	
2	

5.  $y = -x - 4$

x	y
-2	
0	
2	



6.  $x = -4$



x	y
-2	
0	
2	

